




Oxford Cambridge and RSA

Monday 22 May 2023 – Afternoon

**GCSE (9–1) Geography A
(Geographical Themes)**

J383/01 Living in the UK Today

Time allowed: 1 hour



You must have:

- the Resource Booklet (inside this document)

You can use:

- a ruler (cm/mm)
- a scientific or graphical calculator



Please write clearly in black ink. **Do not write in the barcodes.**

Centre number

--	--	--	--	--

Candidate number

--	--	--	--

First name(s)

Last name

INSTRUCTIONS

- Use black ink. You can use an HB pencil, but only for graphs and diagrams.
- Write your answer to each question in the space provided. If you need extra space you should use the lined pages at the end of this booklet. The question numbers must be clearly shown.
- Answer **all** the questions.

INFORMATION

- The total mark for this paper is **60**.
- The marks for each question are shown in brackets [].
- Quality of extended response will be assessed in questions marked with an asterisk (*).
- Spelling, punctuation and grammar (SPaG) and the use of specialist terminology will be assessed in questions marked with a pencil (✎).
- This document has **12** pages.

ADVICE

- Read each question carefully before you start your answer.

Landscapes of the UK

- 1 (a) (i) Look at **Fig. 1** in the Resource Booklet, which shows a landscape at Carding Mill, Shropshire.

Describe how the landscape shown in **Fig. 1** is characteristic of an upland environment.

.....

.....

.....

..... [2]

- (ii) Define the term **biological weathering**.

.....

.....

.....

..... [2]

- (b) Explain how different types of **erosion** affect river channels.

.....

.....

.....

.....

.....

.....

.....


..... [4]

(c)* CASE STUDY

A UK coastal landscape

Name of coastal landscape area in the UK

Evaluate the impact of geomorphic processes on the **formation** of landforms in your chosen coastal landscape. **[12]**

 Spelling, punctuation and grammar and the use of specialist terminology [3]

[illegible]

People of the UK

- 2 (a) (i) Look at **Fig. 2** in the Resource Booklet, a pictogram showing the average number of cars entering a city at 9:00 am on one day.

How many cars enter the city by the A24?

- A 140
- B 1200
- C 1400
- D 2000

Write the correct letter in the box.

[1]

- (ii) What is the **range** of the number of cars entering the city by the routes shown in **Fig. 2**?

- A 1200
- B 1300
- C 1400
- D 1500

Write the correct letter in the box.

[1]

- (iii) Suggest **two** sustainable strategies to overcome one or more challenges in cities.

1

.....

.....

.....

2

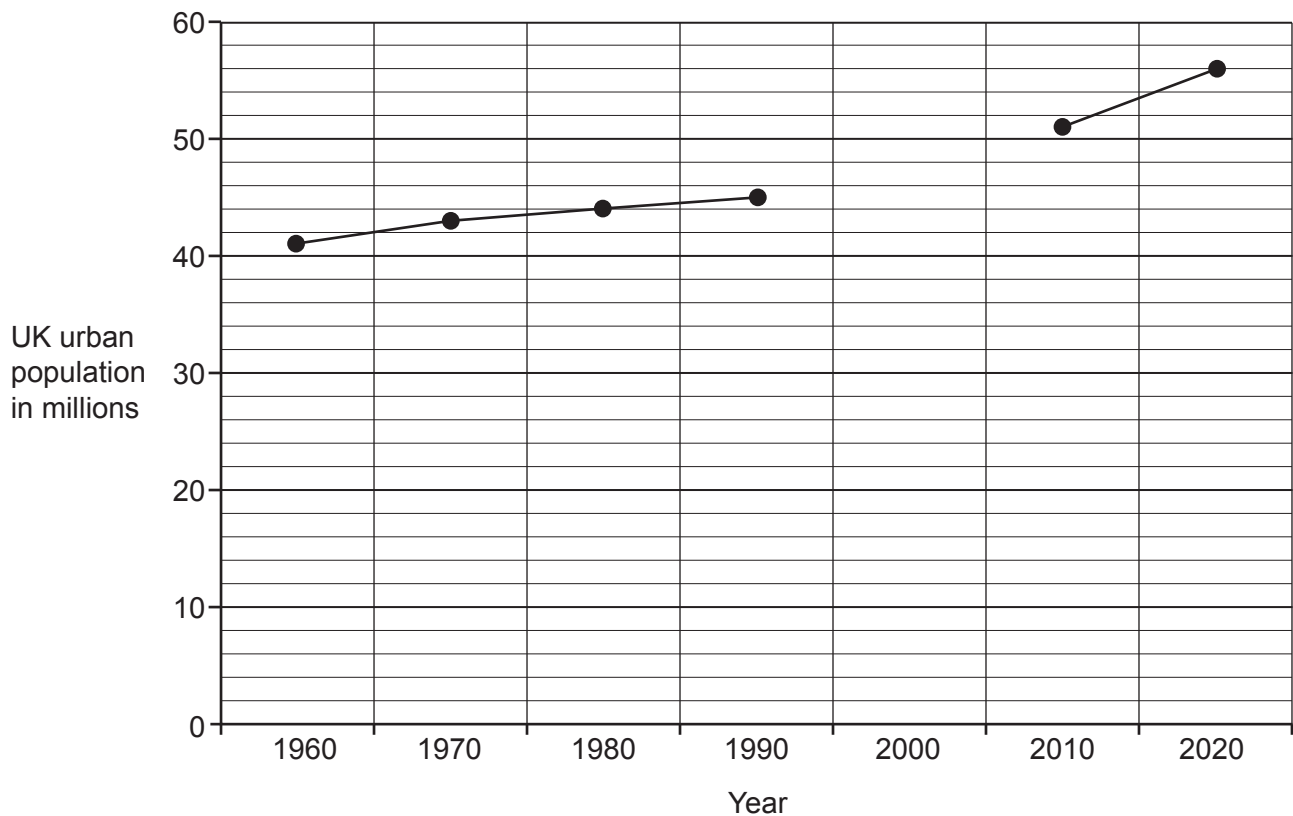
.....

.....

.....

[4]

(b) The line graph below shows changes in the UK's urban population from 1960 to 2020.



(i) Use the data from the table below to complete the graph.

Year	Urban population
2000	46 million

[1]

(ii) Suburbanisation occurs towards the edges of cities.

Which of the following is an **advantage** for the people who live there?

- A It is easy to commute to the city centre
- B There is a high crime rate
- C There are a lot of derelict buildings
- D There is high unemployment

Write the correct letter in the box.

[1]

.....

.....

.....

(c) CASE STUDY

Name of major UK city:

Explain how **one or more** influences, such as those stated above, have impacted on the character of your chosen city.

.....

.....

.....

.....

.....

.....

.....

.....

[6]

UK Environmental Challenges

- 3 (a) (i)** State **three** ways in which environments and ecosystems are **modified** by reservoirs.

1

.....

2

.....

3

.....

[3]

- (ii)** Look at **Fig. 3** in the Resource Booklet, which shows the impacts of commercial fishing.

Using information from **Fig. 3**, suggest impacts of commercial fishing on the environment.

.....

.....

.....

.....

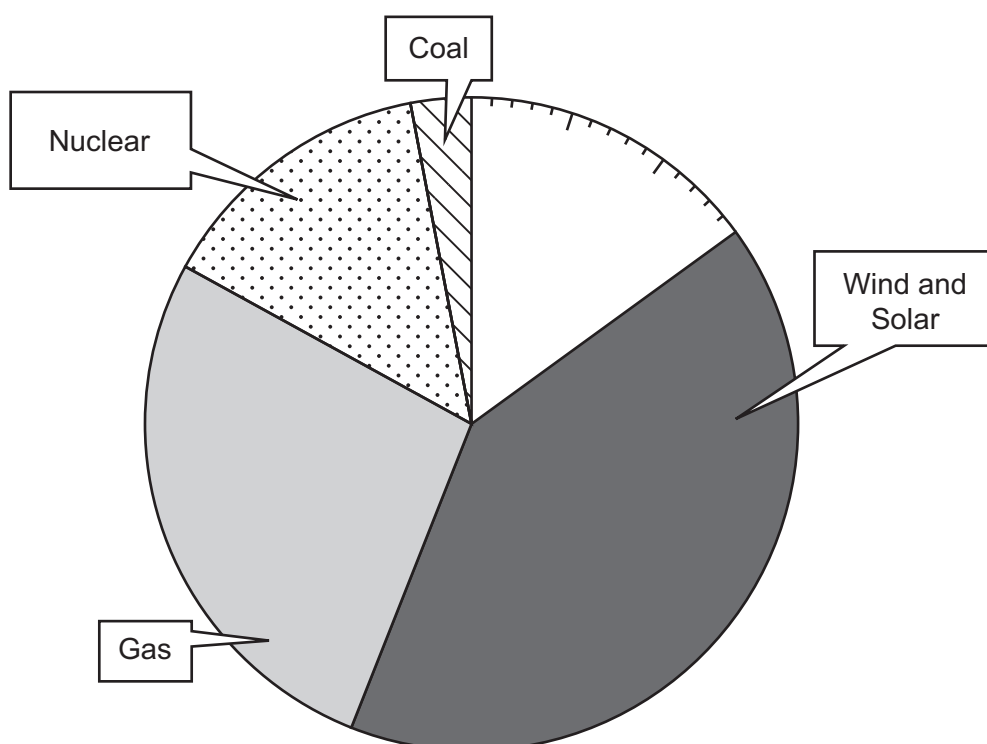
.....

.....

.....

..... **[4]**

(b) The pie chart below shows how electricity was generated in the UK in 2020.



(i) Use the data from the table below to **complete** the pie chart.

Type of energy	% of UK energy generation (2020)	Shading
Biofuel	9%	
Imported Fuel	6%	

[2]

(ii) In the year 2000, the amount of energy produced using gas was 145 Terrawatt hours. By 2019, this had decreased to 130 Terrawatt hours.

Calculate the percentage **decrease** in gas used to produce energy between 2000 and 2019.

Give your answer to **two** decimal places.

You **must** show your working.

..... % [2]

[8]

END OF QUESTION PAPER

[illegible]

Oxford Cambridge and RSA

Copyright Information

OCR is committed to seeking permission to reproduce all third-party content that it uses in its assessment materials. OCR has attempted to identify and contact all copyright holders whose work is used in this paper. To avoid the issue of disclosure of answer-related information to candidates, all copyright acknowledgements are reproduced in the OCR Copyright Acknowledgements Booklet. This is produced for each series of examinations and is freely available to download from our public website (www.ocr.org.uk) after the live examination series.

If OCR has unwittingly failed to correctly acknowledge or clear any third-party content in this assessment material, OCR will be happy to correct its mistake at the earliest possible opportunity.

For queries or further information please contact The OCR Copyright Team, The Triangle Building, Shaftesbury Road, Cambridge CB2 8EA.

OCR is part of Cambridge University Press & Assessment, which is itself a department of the University of Cambridge.